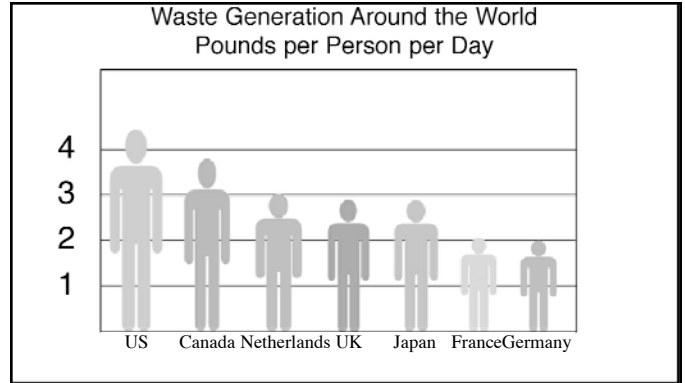


Quiz 2 Intro

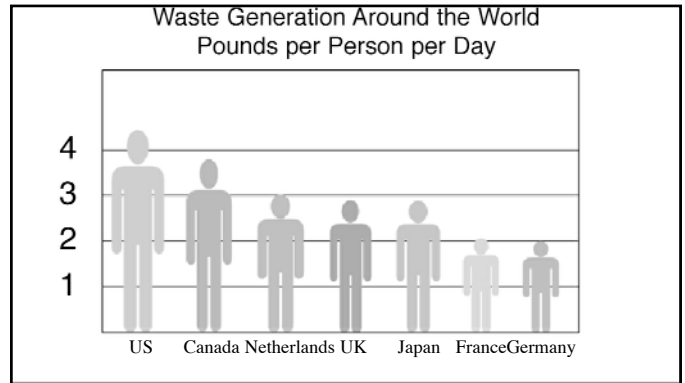
1. According to the chart which country creates the most waste per person?

- A. Canada
- B. US
- C. Japan.



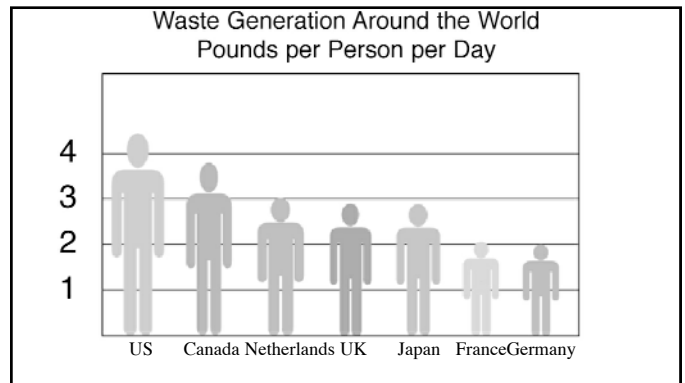
2. Per person per day the US generates more than ...

- A. 3 pounds.
- B. 4 pounds.
- C. 2 pounds.



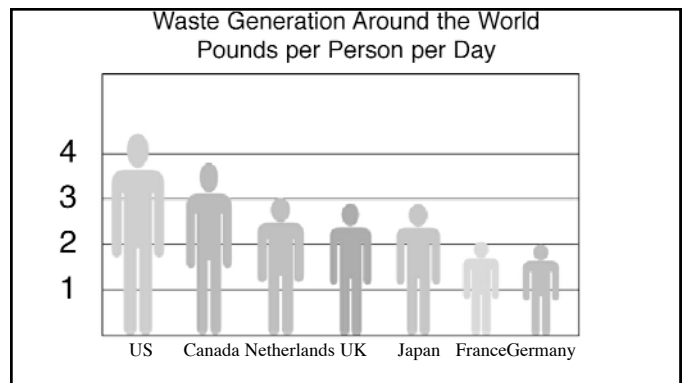
3. Canada generates about ...

- A. the same amount of waste as the US.
- B. one pound more than the US.
- C. one pound less than the US.



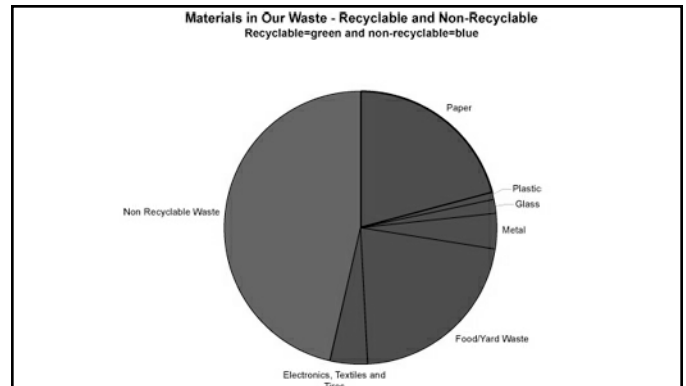
4. The Netherlands, the UK and Japan all generate about ...

- A. 3 pounds per person per day.
- B. 2 pounds per person per day.
- C. 4 pounds per person per day.



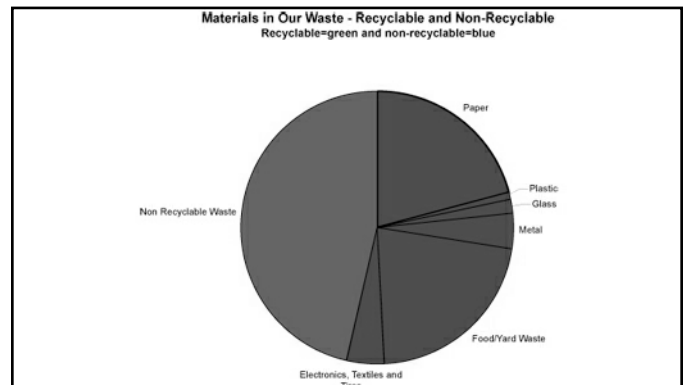
5. According to the chart over _____ of all waste is recyclable.

- A. one third
- B. one half
- C. one fourth



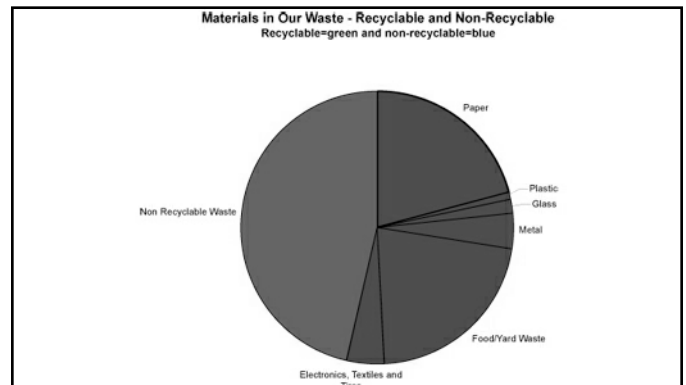
6. According to the chart there is ...

- A. more glass than metal to recycle.
- B. less glass than metal to recycle.
- C. the same amount of glass and metal to recycle.



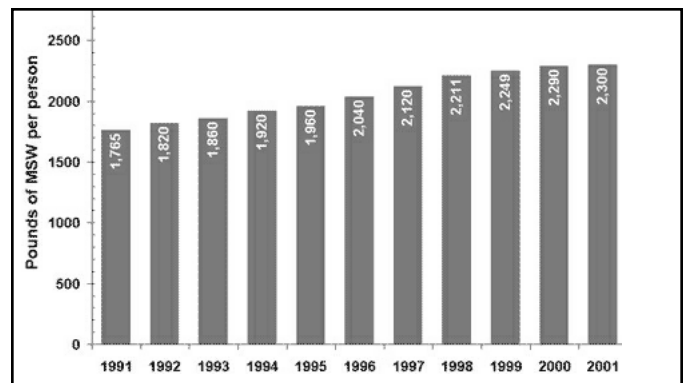
7. According the chart if we recycle all the paper and food and yard waste, we can recycle about _____ of all waste.

- A. 40%
- B. 60%
- C. 20%



8. According to the chart the amount of waste per person in Minnesota ...

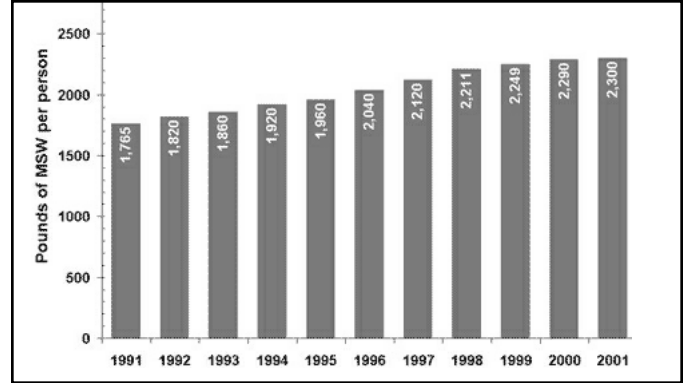
- A. went up slowly from 1991 to 2001.
- B. went down slowly from 1991 to 2001.
- C. stayed the same from 1991 to 2001.



9. According to the chart the amount of waste person first exceeded 2000 pounds in

...

- A. 1995.
- B. 1996.
- C. 1997.



10. Overall the amount of waste per person went up about _____ from 1991 to 2001.

- A. about 300 pounds.
- B. about 400 pounds.
- C. about 500 pounds.

